



NAME _____


DATE _____

COMPARE CLOCKS


Select the correct clock.

Example:

The clocks show when my friends went to dance class.




Wesley




Bitu

Who went to the dance class earlier? Bitu.

1. The clocks show timings of two classes.




Drawing




Maths

Which class is later? _____.

2. The clocks show when my friends left the party yesterday.



Elliott



Braddy

Who left the party earlier? _____.